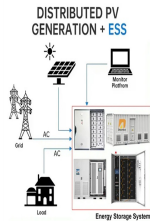
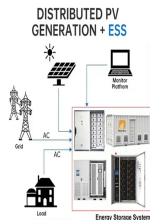


TOTAL ENERGY STORAGE OF THE CIRCUIT DURING PARALLEL RESONANCE



Where is the energy stored in a parallel resonant circuit? A parallel resonant circuit stores the circuit energy in the magnetic field of the inductor and the electric field of the capacitor. At resonance, there will be a large circulating current between the inductor and the capacitor due to the energy of the oscillations, then parallel circuits produce current resonance.



How does a parallel resonant circuit work? A parallel resonant circuit works by storing the circuit energy in the magnetic field of the inductor and the electric field of the capacitor. At resonance, there will be a large circulating current between the inductor and the capacitor due to the energy of the oscillations.



What is parallel resonance in RLC? In other words, the parallel resonance in the RLC parallel circuit occurs when the energy stored in the inductor and capacitor oscillates back and forth between them, and no energy will be drawn from the source. The resonance occurs when the instantaneous values of currents I_L and I_C are equal and opposite to each other.

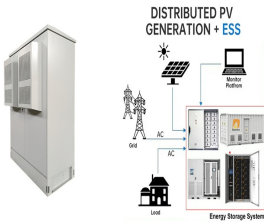


What is a parallel resonance network? A parallel resonance network is a circuit consisting of a resistor, a capacitor, and an inductor connected in parallel. In the given example, the network consists of a 60Ω resistor, a $120\mu\text{F}$ capacitor, and a 200mH inductor.

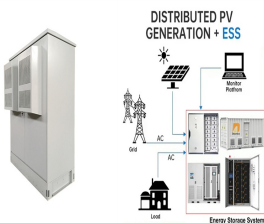


What is the difference between series resonance and parallel resonance? In series resonance, the Q-factor indicates the amplification of voltage at resonance, while in parallel resonance, it signifies the amplification of current at resonance. We have a circuit with a resistor (65Ω), capacitor ($140\mu\text{F}$), and inductor (220mH) connected in parallel.

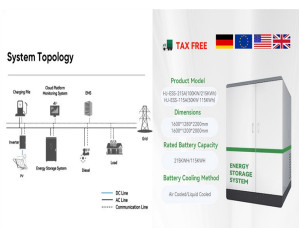
TOTAL ENERGY STORAGE OF THE CIRCUIT DURING PARALLEL RESONANCE



How do you find the admittance of a parallel resonant circuit? The admittance of a parallel RLC circuit is given by (derived in the above section) At resonance, substituting $X_L = X_C$, we get, Hence, the admittance of a parallel resonant circuit is equal to the reciprocal of resistance R of the circuit. (4). Voltage Across Each Element At parallel resonance, Therefore,



Resonance ??? Prominent feature of the frequency response of a circuit is the sharp (resonant) peak of its amplitude characteristics. ??? An ac circuit consisting of inductor and capacitor is at resonance when the applied ???



Two-element circuits and uncoupled RLC resonators. RLC resonators typically consist of a resistor R , inductor L , and capacitor C connected in series or parallel, as illustrated in Figure 3.5.1. RLC resonators are of ???



Explanation: Force in a Magnetic Circuit with Coil Inductance L Dependent on x . Definition: The force in a magnetic circuit can be derived from the energy stored in the magnetic field. When a magnetic circuit with coil ???



In a parallel LC circuit near resonance, Z total is nearly infinite, I total is small, and both I_L and I_C are large as well. Follow-up question: suppose the inductor were to fail open. Identify how this failure would alter the circuit's ???

TOTAL ENERGY STORAGE OF THE CIRCUIT DURING PARALLEL RESONANCE



This document discusses parallel resonance in an electrical circuit. It defines parallel resonance as occurring when circuit elements are connected in parallel with their inductance and capacitance, causing impedance to rise to a ???



Question 2. (Click on arrow for answer) This simple electric circuit is capable of resonance, whereby voltage and current oscillate at a frequency characteristic to the circuit:. In a mechanical resonant system ??? such as a tuning fork, a bell, ???



A practical application of "Q" is that voltage across L or C in a series resonant circuit is Q times total applied voltage. In a parallel resonant circuit, current through L or C is Q times the total applied current. Series Resonant ???




Consider the Parallel RLC circuit of figure 1. The steady-state admittance offered by the circuit is: Resonance occurs when the voltage and current at the input terminals are in phase. This corresponds to a purely real admittance, so that ???



Series LC resonant circuit with resistance in parallel with C. resonant circuit v1 1 0 ac 1 sin r1 1 2 1 c1 2 3 10u r2 2 3 100 l1 3 0 100m .ac lin 20 100 200 .plot ac i(v1) .end Maximum current at 136.8 Hz instead of 159.2 ???

TOTAL ENERGY STORAGE OF THE CIRCUIT DURING PARALLEL RESONANCE



For any simple resonant circuit with two energy storage elements, whether series or parallel connected, it can be shown that the resonant frequency can be calculated by . $\frac{1}{\omega^2 LC} = 1$???



An electric pendulum. Capacitors store energy in the form of an electric field, and electrically manifest that stored energy as a potential: static voltage ductors store energy in the form of a magnetic field, and electrically ???



The document discusses series and parallel resonance circuits. Some key points: - In a series RLC circuit, the impedance is purely resistive at resonance when the inductive and capacitive reactances are equal. Maximum ???



At resonance the current aligns in phase with the voltage because the circuit impedance acts like a resistance. As observed the impedance of the parallel circuit at resonance is equivalent to the resistance value. This value ???



I've a doubt about how the energy is stored in a "real" RLC parallel resonant network feeds from a sinusoidal source. Take a "real" RLC parallel network having a resistor in series with the inductor (modeling its loss) ???

TOTAL ENERGY STORAGE OF THE CIRCUIT DURING PARALLEL RESONANCE



Parallel resonant circuits. A parallel resonant circuit is resistive at the resonant frequency. At resonance $X_L = X_C$, the reactive components cancel. The impedance is maximum at resonance. Below the resonant frequency, the ???



Key learnings: LC Circuit Definition: An LC circuit consists of an inductor and a capacitor, oscillating energy without consuming it in its ideal state.; Series Configuration: In series LC circuits, the components share the same ???



Consider a series RLC circuit where a resistor, inductor and capacitor are connected in series across a voltage supply. This series RLC circuit resonates at a specific frequency known as the resonant frequency. In this ???



In contrast to series resonance, parallel RLC circuits (with resistor R, inductor L, and capacitor C) exhibit "parallel resonance" (or anti-resonance) when the total current aligns in phase with the supply voltage. At this ???



Learn the difference between ideal and practical parallel RLC resonant circuits and how to calculate admittance and impedance in parallel RLC resonant circuits. A parallel RLC circuit contains a resistor (R), an inductor (L), ???